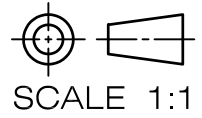


Make measurements from a given orthographic view and complete the dimensions. (10 points)



(a)



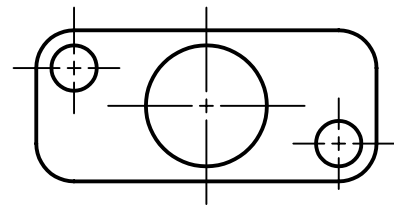
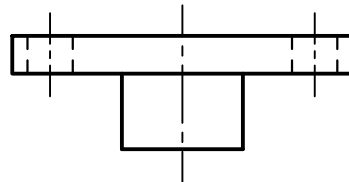
(b)



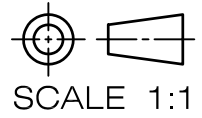
(c)



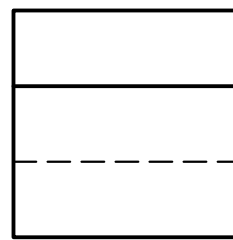
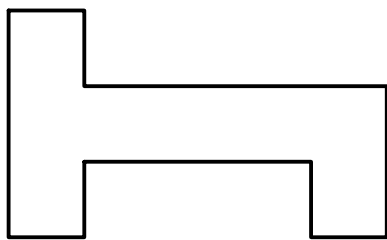
(d)



Make measurements from a given orthographic view and complete the dimensions.



(a)



(b)

